




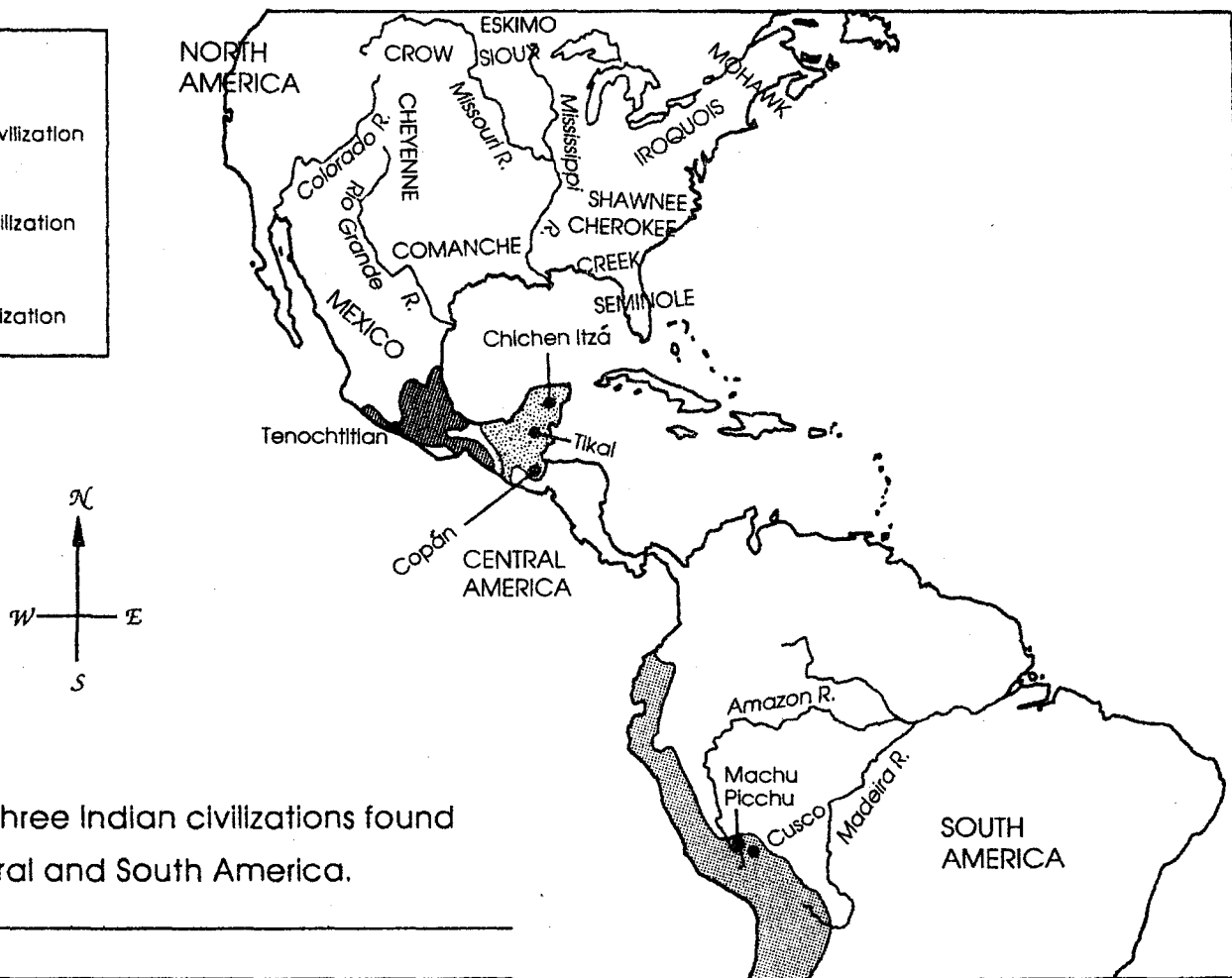
Native Cultures of America

Name _____

Use this map and a political map of North and South America to answer the questions.

Map Key

-  Aztec Civilization
-  Maya Civilization
-  Inca Civilization



1. Name three Indian civilizations found in Central and South America.

2. The Inca civilization was on the continent of _____.
3. The Maya civilization was found in _____ America and Mexico.
4. _____ was the site for the Aztec civilization.
5. The _____ lived in the northernmost part of North America.
6. The _____ tribe lived in what is now the state of Florida.
7. The Creek and Shawnee lived _____ of the Mississippi River.
8. The Crow lived near the _____ River.
9. Match the city to the civilization by placing the correct letter in the blank.

Aztec = **A**

Maya = **M**

Inca = **I**

- A. Machu Picchu _____
- B. Chichen Itzá _____
- C. Cusco _____

- D. Tenochtitlan _____
- E. Copán _____
- F. Tikal _____